



- 3 a. Define a tree and a forest. Prove that a tree with two or more vertices contains at least 2 leaves. Further, show that if a tree has exactly two pendent vertices, the degree of every non-pendant vertex is two. (06 Marks)
- b. Show that a Hamilton path is a spanning tree. Draw all the spanning trees of the graph Fig.Q.3(b). (06 Marks)

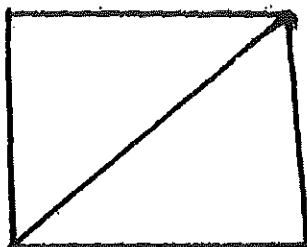


Fig.Q.3(b)

- c. Construct an optimal prefix code for the letters of the word 'ENGINEERING'. Hence deduce the code for this word. (08 Marks)
- 4 a. Apply Prim's algorithm to find a minimal spanning tree for the graph Fig.Q.4(a). (07 Marks)

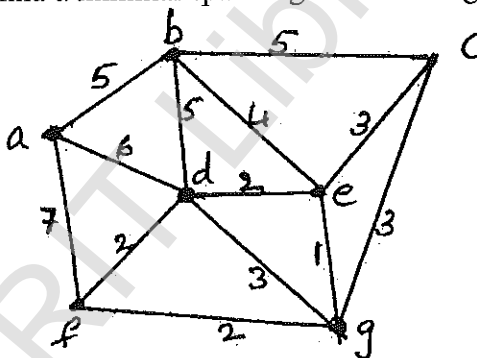


Fig.Q.4(a)

- b. Apply Dijkstra's algorithm to the weighted digraph, to find the shortest distance from vertex 1 to each of the other vertices Fig.Q.4(b). (08 Marks)

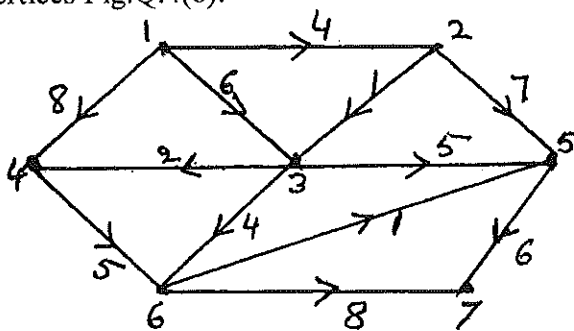


Fig.Q.4(b)

- c. Define matching. Five students  $s_1, s_2, s_3, s_4, s_5$  are members of 3 committees  $c_1, c_2, c_3$ . The committee  $c_1$  has  $s_4$  and  $s_3$  as members, the committee  $c_2$  has  $s_1, s_3, s_5$  as members and the committee  $c_3$  has  $s_2$  and  $s_5$  as members. Each committee is to select a student representative. Can a selection be made in such a way that each committee has a distinct representative? (05 Marks)

**PART - B**

- 5 a. How many arrangements are there for all the letters in the word 'SOCIOLOGICAL'? In how many of these arrangements i) A and G are adjacent? ii) All the vowels are adjacent? (07 Marks)
- b. Find the coefficient of i)  $x^{12}$  in the expansion of  $x^3(1-2x)^{10}$  and ii)  $x^2y^2z^3$  in the expansion of  $(3x-2y-4z)^7$ . (06 Marks)
- c. Define Catalan number. Using the moves R:  $(x, y) \rightarrow (x+1, y)$  and u:  $(x, y) \rightarrow (x, y+1)$  find in how many ways can one go,  
 i) From  $(0, 0)$  to  $(6, 6)$  and not rise above the line  $y = x$ ?  
 ii) From  $(2, 1)$  to  $(7, 6)$  and not rise above the line  $y = x - 1$ ? (07 Marks)
- 6 a. Find the number of non-negative integer solutions of the equation  $x_1 + x_2 + x_3 + x_4 = 18$  under the condition  $x_i \leq 7$  for  $i = 1, 2, 3, 4$ . (07 Marks)
- b. There are  $n$  pairs of children's gloves in a box. Each pair is of a different colour. Suppose the right gloves are distributed at random to  $n$  children and there after the left gloves are also distributed to them at random. Find the probability that,  
 i) No child gets a matching pair.  
 ii) Every child gets a matching pair.  
 iii) Exactly one child gets a matching pair. (06 Marks)
- c. Find the rook polynomial for the board shown below (shaded part). (07 Marks)

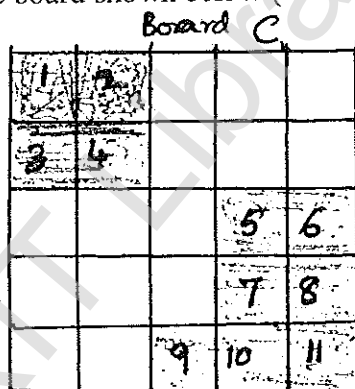


Fig.Q.6(c).

- 7 a. Using generating function, derive the formula  $\sum_{k=0}^n k^3 = \left\{ \frac{n(n+1)}{2} \right\}^2$ . (07 Marks)
- b. In how many ways can 12 oranges be distributed among 3 children A, B, C so that A gets at least 4, B and C gets at least 2, but C gets no more than 5? (07 Marks)
- c. A company appoints 11 software engineers, each of whom is to be assigned to one of four offices of the company. Each office should get at least one of these engineers. In how many ways can these assignments be made? (06 Marks)
- 8 a. Find the recurrence relation and the initial condition for the sequence 0, 2, 6, 12, 20, 30, 42, ... Hence find the general term of the sequence. (06 Marks)
- b. Solve the recurrence relation  $a_n + a_{n-1} - 6a_{n-2} = 0$  for  $n \geq 2$  given that  $a_0 = -1$  and  $a_1 = 8$ . (07 Marks)
- c. Find the generating function for the recurrence relation,  $a_{n+2} - 5a_{n+1} + 6a_n = 2, n \geq 0$  and  $a_0 = 3, a_1 = 7$ . Hence solve it. (07 Marks)

\*\*\*\*\*