

USN

--	--	--	--	--	--	--	--

Fourth Semester B.E. Degree Examination, Dec.2019/Jan.2020 Signals and Systems

Time: 3 hrs.

Max. Marks: 80

Note: Answer any FIVE full questions, choosing ONE full question from each module.

Module-1

- 1 a. Sketch the even and odd parts of the signals shown in Fig.Q1(i) and (ii) (08 Marks)

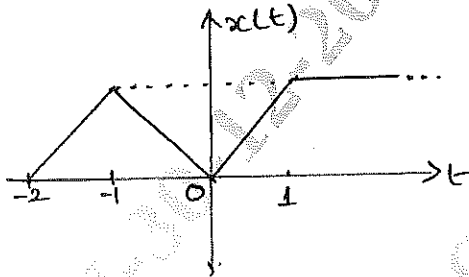


Fig.Q1(i)

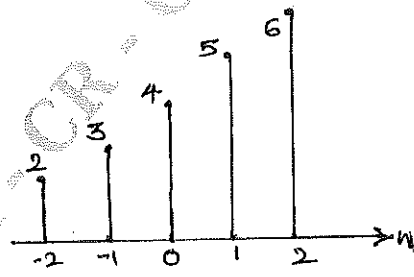


Fig.Q1(ii)

- b. Determine whether the following signal is periodic or not if periodic find the fundamental period. $x(t) = \sin^2(4t)$. (03 Marks)
- c. The trapezoidal pulse $x(t)$ shown in Fig.Q1(c) is applied to a differentiator is $y(t) = \frac{dx(t)}{dt}$.
- i) Find the resulting output $y(t)$ of the differentiator ii) Find the energy of $y(t)$. (05 Marks)



Fig.Q1(c)

OR

- 2 a. Determine whether the following systems are memoryless, causal, time invariant, linear and stable. i) $y(t) = x(t^2)$ ii) $y(n) = \log_{10}(|x(n)|)$. (08 Marks)
- b. i) A continuous time signal $x(t)$ is shown in Fig.Q2(b) sketch $y(t) = [x(t) + x(2-t)] u(1-t)$.
ii) Sketch the signal : $x(n) = 1; -1 \leq n \leq 3$
 $= \frac{1}{2}; n = 4$
 $= 0; \text{elsewhere}$
- Sketch : i) $2x(2n)$ ii) $\frac{1}{2}x(n) + \frac{1}{2}(-1)^n x(n)$. (08 Marks)

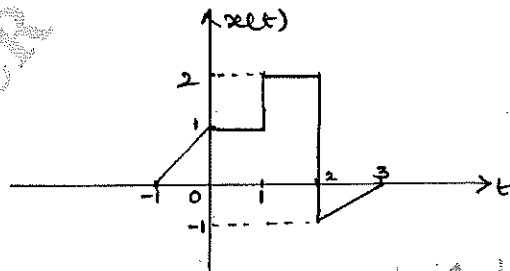


Fig.Q2(b)

Important Note : 1. On completing your answers, compulsorily draw diagonal cross lines on the remaining blank pages.
2. Any revealing of identification, appeal to evaluator and /or equations written eg, 42+8 = 50, will be treated as malpractice.

Module-2

3 a. Prove the following :

$$i) x(t) * u(t) = \int_{-\infty}^t x(\tau) d\tau$$

$$ii) x(n) * [h_1(n) * h_2(n)] = \{x(n) * h_1(n)\} * h_2(n). \quad (08 \text{ Marks})$$

b. Compute the convolution sum of $y(n) = \beta^n u(n) * \alpha^n u(n)$; $|\beta| < 1$ and $|\alpha| < 1$. (08 Marks)

OR

4 a. State and prove the associative and commutative properties of convolution integral. (08 Marks)

b. Compute the convolution integral of $x(t) = e^{-2t}u(t)$ and $h(t) = u(t + 2)$. (08 Marks)

Module-3

5 a. A system consists of several subsystems connected as shown in Fig.Q5(a). Find the operator T relating $x(t)$ to $y(t)$ for the subsystem operators given by

$$T_1 : y_1(t) = x_1(t) x_1(t - 1)$$

$$T_2 : y_2(t) = |x_2(t)|$$

$$T_3 : y_3(t) = 1 + 2x_3(t)$$

$$T_4 : y_4(t) = \cos(x_4(t))$$

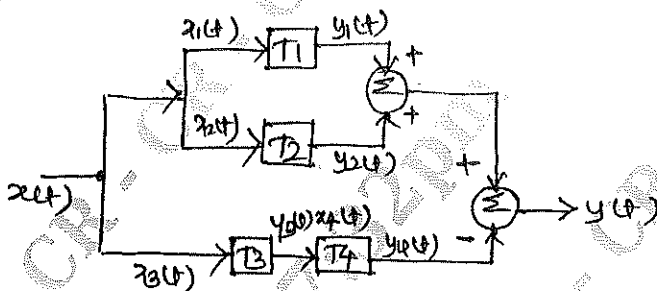


Fig.Q5(a)

(04 Marks)

b. Determine whether the following systems defined by their impulse response are causal, memoryless and stable.

$$i) h(t) = e^{-4|t|}$$

$$ii) h(n) = (0.99)^n u(n + 3). \quad (06 \text{ Marks})$$

c. Evaluate the step response for the LTI system represented by the following impulse response

$$i) h(n) = e^{-t}u(t) * \delta(t - 2)$$

$$ii) h(n) = (-1)^n \{u(n + 2) - u(n - 3)\}. \quad (06 \text{ Marks})$$

OR

6 a. State the following properties of CTFS :

i) Time shift

ii) Differentiation in time domain

iii) Linearity

iv) Convolution

v) Frequency shift scaling. (06 Marks)

b. Determine the DTFS coefficients of the signal

$$x(n) = \cos\left(\frac{6\pi}{13}n + \frac{\pi}{6}\right)$$

Draw : i) Magnitude spectrum

ii) Phase spectrum. (10 Marks)

Module-4

7 a. State and prove the following properties :

i) $y(t) = x(t - t_0) \xrightarrow{FT} Y(j\omega) = e^{-j\omega t_0} X(j\omega)$

ii) $-jtx(t) \xrightarrow{FT} \frac{d}{d\omega} X(j\omega).$

(06 Marks)

b. Find the DTFT of the following signals :

i) $x(n) = (-1)^n u(n)$

ii) $x(n) = \left(\frac{1}{2}\right)^n \{u(n+3) - u(n-2)\}.$

(10 Marks)

OR

8 a. Find the FT of the signal : $x(t) = te^{-2t} u(t).$

(06 Marks)

b. Find the FT of unit step function.

(04 Marks)

c. Determine the signal $x(n)$ if its spectrum is shown in Fig.Q8(c).

(06 Marks)

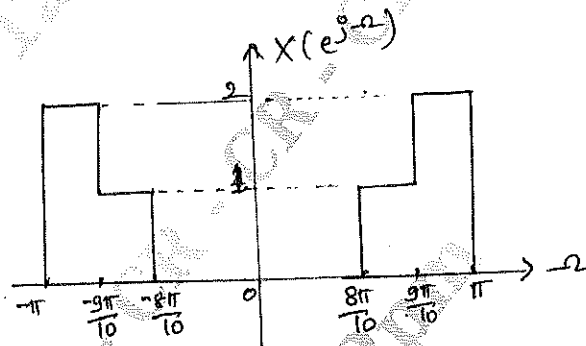


Fig.Q8(c)

Module-5

9 a. Explain properties of ROC with example.

(06 Marks)

b. Determine the z-transform of the following signals.

i) $x(n) = \left(\frac{1}{3}\right)^n \sin\left(\frac{\pi}{4}n\right) u(n)$

ii) $x(n) = \left(\frac{1}{2}\right)^n \{u(n) - u(n-10)\}.$

(10 Marks)

OR

10 a. Find the corresponding time domain signals corresponding to the following z-transform.

$$x(z) = \frac{z^2 - 3z}{z^2 + \frac{3}{2}z - 1}; \text{ ROC ; } \frac{1}{2} < |z| < 1.$$

(06 Marks)

b. The input and output of an LTI system is given by

$$x(n) = u(n)$$

$$y(n) = \left(\frac{1}{2}\right)^{n-1} u(n+1).$$

Find :

i) Transfer function

ii) Impulse response

iii) Is the system stable?

iv) Is the system causal?

(10 Marks)

