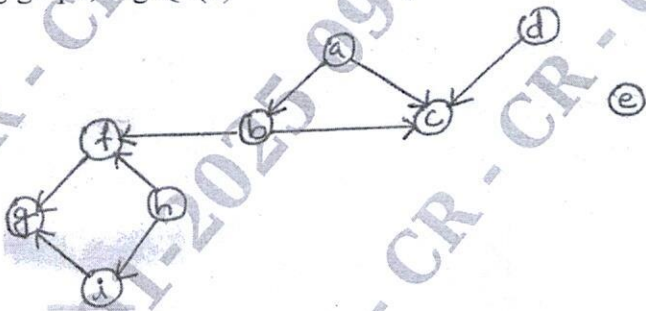
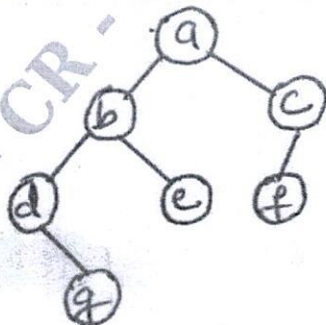




Fourth Semester B.E./B.Tech. Degree Examination, Dec.2024/Jan.2025
Analysis and Design of Algorithms

Max. Marks: 100

Note: 1. Answer any FIVE full questions, choosing ONE full question from each module.
 2. M : Marks , L: Bloom's level , C: Course outcomes.

Module – 1				M	L	C
Q.1	a.	Explain the various steps in algorithm design and analysis process with the flow diagram.	08	L1	CO1	
	b.	Give formal and informal definitions of asymptotic notations.	06	L1	CO1	
	c.	Explain the general plan of mathematical analysis of recursive algorithm with an example.	06	L1	CO1	
OR						
Q.2	a.	Design algorithm for tower of Hanoi problem and obtain time complexity.	10	L1	CO1	
	b.	Write an algorithm to search an element in an array using sequential search. Discuss the best case, worst case and average case efficiency of this algorithm.	10	L1	CO1	
Module – 2						
Q.3	a.	Write an algorithm to sort the numbers using insertion sort. Discuss its efficiency.	10	L2	CO2	
	b.	Design quick sort algorithm and obtain its best, average and worst case efficiency.	10	L2	CO2	
OR						
Q.4	a.	Write merge sort algorithm and sort the list E X A M P L E.	08	L2	CO2	
	b.	Apply the DFS based algorithm to solve the topological sorting problem for the following graph, Fig.Q4(b)	06	L3	CO2	
						
Fig.Q4(b)						
	c.	Write algorithm for pre-order, post order and in order traversals of a tree. Write pre-order, in-order and post order for the given tree.	06	L2	CO2	
						
Fig.Q4(c)						

1 of 3

Module – 3

Q.5	a.	Define AVL tree. Construct AVL tree for the list 5, 6, 8, 3, 2, 4, 7.	10	L3	CO3
	b.	Define heap. Sort the following lists by heapsort: H E A P S O R T (in alphabetical order)	10	L3	CO3

OR

Q.6	a.	Write the algorithm for comparison counting sort. Discuss its efficiency.	10	L2	CO4
	b.	Design Horspools algorithm for string matching. Apply Horspools algorithm to find the pattern BARBER on the text JIM SAW ME IN BARBERSHOP	10	L3	CO4

Module – 4

Q.7	a.	Write Warshall's algorithm and apply the same to compute transitive closure of a directed graph. <div style="text-align: center;"> a b c d e a $\begin{bmatrix} 1 & 0 & 0 & 1 & 0 \\ 0 & 1 & 0 & 0 & 0 \\ 0 & 0 & 0 & 1 & 1 \\ 1 & 0 & 0 & 0 & 0 \\ 0 & 1 & 0 & 0 & 1 \end{bmatrix}$ b c d e </div>	10	L3	CO3
-----	----	--	----	----	-----

- b. Construct minimum cost spanning tree using Kruskal's algorithm for the following graph, Fig.Q7(b).

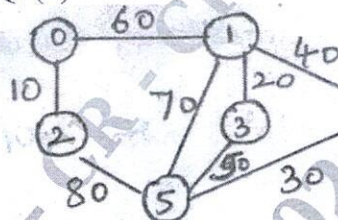


Fig.Q7(b)

OR

Q.8	a.	Solve the following single source shortest path problem assuming vertex '5' as the source.	10	L3	CO4
-----	----	--	----	----	-----

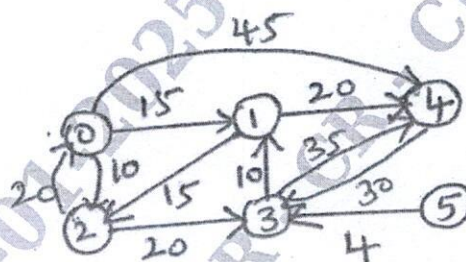


Fig.Q8(a)

- b. Write Huffman's algorithm. Construct Huffman tree and resulting code word for the following:

Character	A	B	C	D	E	-
Probability	0.5	0.35	0.5	0.1	0.4	0.2

Encode the text DAD_CBE.

Module – 5

Q.9	a.	Explain the following with example: (i) P problem (ii) NP problem	06	L1	CO5
	b.	What is decision tree? Construct decision tree for the three element insertion sort.	08	L2	CO5
	c.	Construct state space tree to solve 4 queens problem.	06	L3	CO5

OR

Q.10	a.	What is backtracking? Apply back tracking to solve the below instance of sum of subset problem: $s = \{3, 5, 6, 7\}$, $d = 15$	10	L3	CO6															
	b.	Solve the following instance of knapsack problem using branch and bound technique knapsack capacity = 10. <table><tr><th>Item</th><th>Weight</th><th>Value</th></tr><tr><td>1</td><td>4</td><td>40</td></tr><tr><td>2</td><td>7</td><td>42</td></tr><tr><td>3</td><td>5</td><td>25</td></tr><tr><td>4</td><td>3</td><td>12</td></tr></table>	Item	Weight	Value	1	4	40	2	7	42	3	5	25	4	3	12	10	L4	CO6
Item	Weight	Value																		
1	4	40																		
2	7	42																		
3	5	25																		
4	3	12																		

CMRIT LIBRARY
BANGALORE - 560 037

CHARTERED